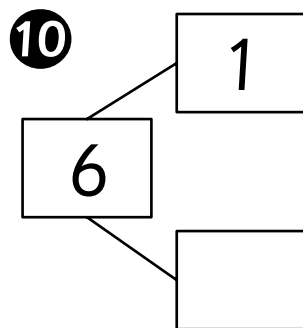
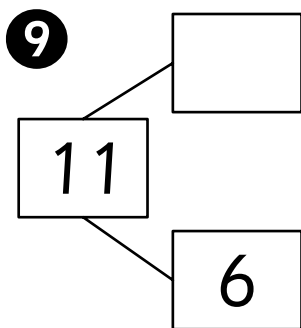
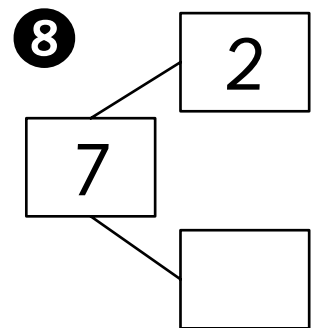
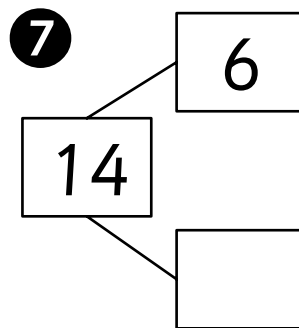
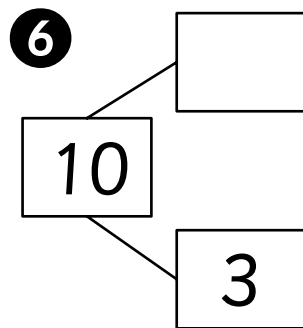
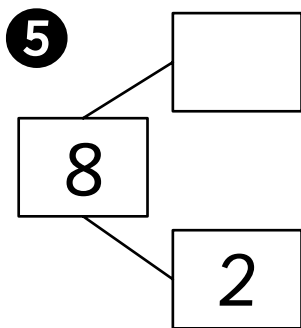
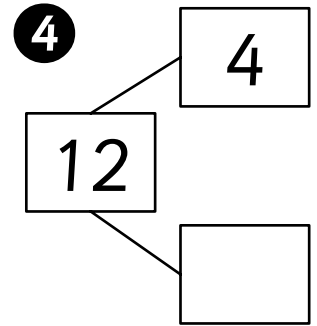
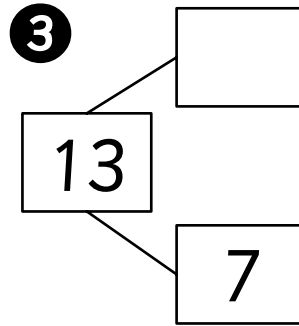
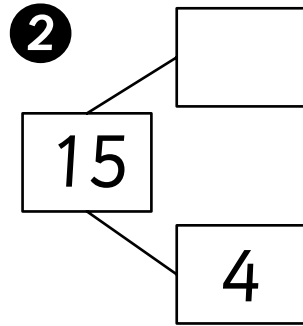
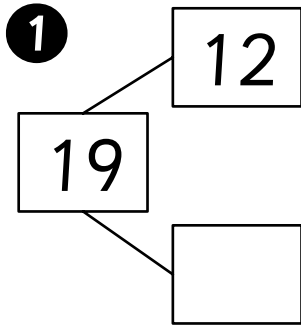




Name: _____ Class: _____

Complete the number bonds.



Fill in the missing numbers.

11 $17 = 5 + \underline{\hspace{2cm}}$

12 $\underline{\hspace{2cm}} + 14 = 19$

13 $\underline{\hspace{2cm}} = 7 + 5$

14 $15 + \underline{\hspace{2cm}} = 17$

15 $\underline{\hspace{2cm}} + 9 = 13$

16 $8 + 3 = \underline{\hspace{2cm}}$

17 $7 = \underline{\hspace{2cm}} + 4$

18 $17 = 6 + \underline{\hspace{2cm}}$

19 $\underline{\hspace{2cm}} + 10 = 13$

20 $5 + 9 = \underline{\hspace{2cm}}$